



UNICUS
OLYMPIADS

#UnicusIsUnique

Sample Paper



Class 2

Unicus Critical Thinking Olympiad (UCTO)

Time: 60 minutes

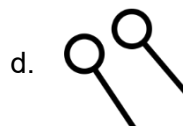
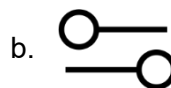
Pattern and Marking Scheme			
Section	Total Questions	Marks per Question	Total Marks
Classic Section	30	1	30
Scholar Section	5	2	10
Grand Total	35		40

Classic Section (Each Question is 1 Mark)

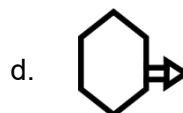
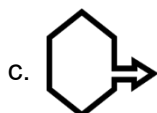
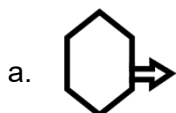
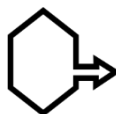
1. Find the odd one out from the given options:



2. Find the odd one out from the given options:

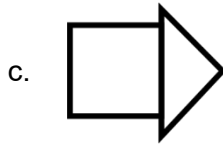
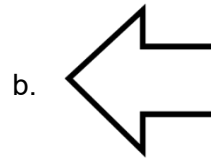
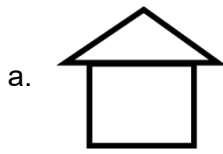


3. Which object is same as the given figure?



Unicus Critical Thinking Olympiad (UCTO)

4. Three of the given figures are identical in a certain way. Choose the one that is different from the rest:



-
5. What will come next in the following pattern?

10, 8, 6, 4

a. **2**

b. **3**

c. **0**

d. **1**

-
6. In the following question, some groups of letters are given, all of which except one, share a common similarity while one is different. Select the odd one:

a. U
c. E

b. I
d. B

-
7. If there are 8 planets in the solar system, then how many colours are there in the rainbow?

a. 6
c. 7

b. 5
d. 8

-
8. If there are 5 students in the class, and you stand 4th in your academics, what is your position from behind?

a. 4th
c. 1st

b. 3rd
d. 2nd


Unicus Critical Thinking Olympiad (UCTO)


9. Different objects are given below. How many objects are U-shaped in upward direction?




- a. 5
c. 4
- b. 6
d. 7

10. Look at the object given below. Which among the following objects matches with the given object?



- a. 
- b. 
- c. 
- d. 

11. How many straight lines can you see in the given figure?



- a. 7
c. 2
- b. 5
d. 6

12. If you are asked to select an odd one from the following, which one would you select?
Milkshake, Bread, Fruit juices, Tea, Coffee, Milk

- a. Bread
c. Milk
- b. Fruit juices
d. Tea

13. Complete the following pattern:



14. You use a spoon to have soups and porridge. For what will you use the knife?

- a. To chop vegetables
c. To saute vegetables

- b. To eat noodles
d. To drink water

15. Mother asked Richard and Susan the colour of apple and banana. Susan answered correctly. What according to you is the colour of a banana?

- a. Red
c. Orange

- b. Pink
d. Yellow

16. If a pencil is kept in pencil box, then a book is kept in which among the following options?

- a. Bag
c. Bottle

- b. Sack
d. Container

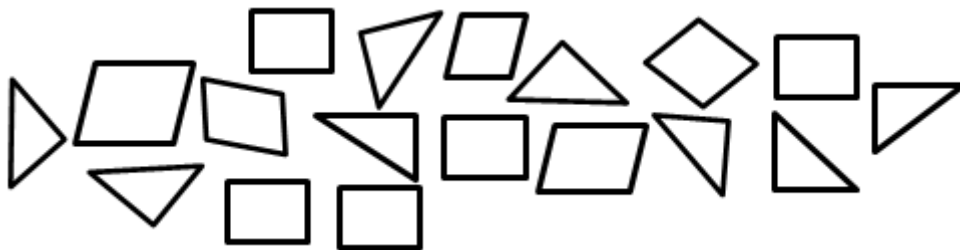
17. There are different variety of fruits kept in a row. Which fruit is at the 4th position towards the left from the banana?



- a. Mango
c. Chickoo

- b. Guava
d. Pineapple

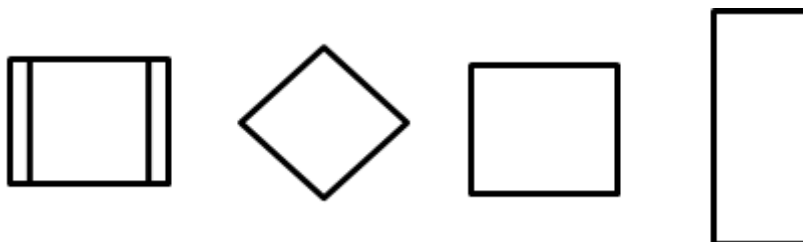
18. How many triangles can you see below?




- a. 9
- c. 8

- b. 10
- d. 6

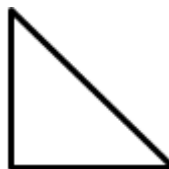
19. Certain shapes are given below. Which among the following options does not match with the given figure?



a.




b.



c.



d.



20. Which among the following options are showing slanting lines?


a.




b.



c.



d.



Unicus Critical Thinking Olympiad (UCTO)

21. What is the shape of the given object?



- a. Triangle
- b. Square
- c. Circle
- d. Rectangle

22. If you are asked to select anyone among the options given below, which does not fit in the given sequence, then which one would you select?

Cake, Chocolates, Pastries, Gram

- a. Chocolates
- b. Gram
- c. Pastries
- d. Cake

23. Find the odd one out from the following sequence:

Tie, Trousers, T-shirts, Shirt, Top

- a. Top
- b. T-shirts
- c. Trousers
- d. Shirt

24. Complete the following pattern:



a.



b.



c.



d.



25. How many sides can you see in the given object?



Unicus Critical Thinking Olympiad (UCTO)

- a. 3
- c. 5

- b. 2
- d. 4

26. How many sides are there in a rectangle?

- a. 2
- c. 3

- b. 0
- d. 4

27. Which among the following objects would be heaviest?

- 1. Computer
- 2. Cup
- 3. Pillow
- 4. Toy train

- a. Pillow
- c. Computer

- b. Toy train
- d. Cup

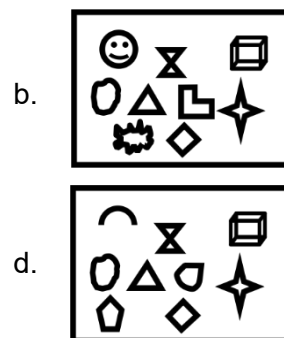
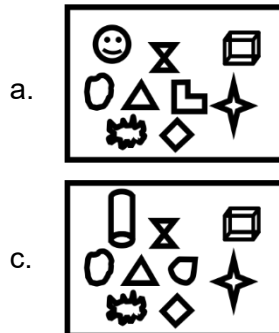
28. Which among the following objects will hold more milk?



- a. Figure A
- c. Figure C

- b. Figure B
- d. Figure D

29. Among the given options, which one of them consists of the image that is shown below?


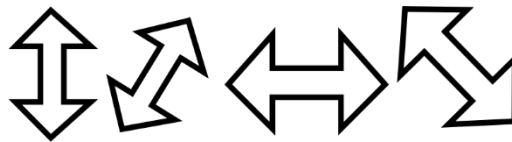


30. Which among the following options have 15 smileys?



Scholar Section (Each Question is 2 Marks)

31. What will come next in the following pattern?



32. Out of the yellow, blue, red and green power rangers, green is to the left of blue, yellow is between red and blue and red is the first from the right. Who is at the 2nd position from left?

- a. Yellow
c. Red

- b. Blue
d. Green

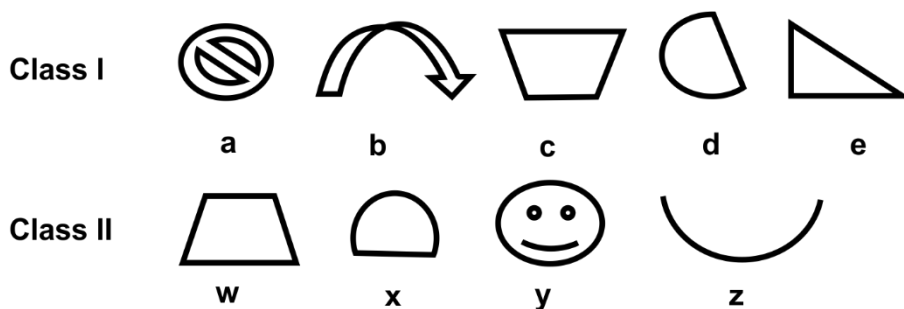
33. Given below are different objects. What is the position of the object starting from left that is 3rd object from the right?



- a. 2nd
c. 4th

- b. 3rd
d. 5th

34. Which among the following objects cannot form a group?



- a. Figure (y)
c. Figure (e)

- b. Figure (c)
d. Figure (w)

35. Which among the following will have more than 4 sides?

- a. Square and triangle
c. Rectangle and square

- b. Pentagon and rectangle
d. Star and pentagon

Answer Key

1.	b	2.	d	3.	c	4.	b	5.	a	6.	d	7.	c
8.	d	9.	a	10.	b	11.	d	12.	a	13.	c	14.	a
15.	d	16.	a	17.	d	18.	c	19.	b	20.	d	21.	d
22.	b	23.	c	24.	a	25.	d	26.	d	27.	c	28.	a
29.	c	30.	c	31.	a	32.	b	33.	b	34.	c	35.	d